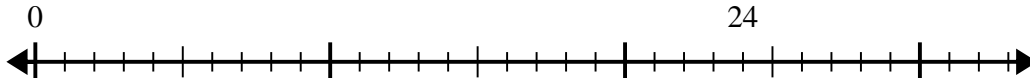


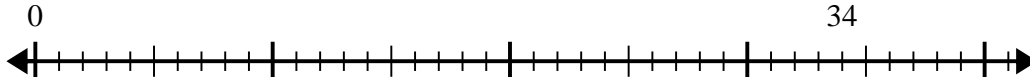


Use the number line to solve the division problem.

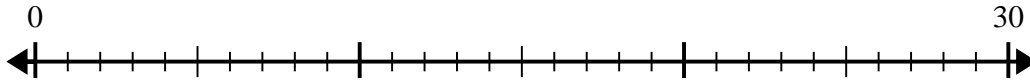
1) $24 \div 7 =$



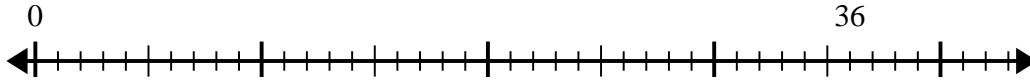
2) $34 \div 4 =$



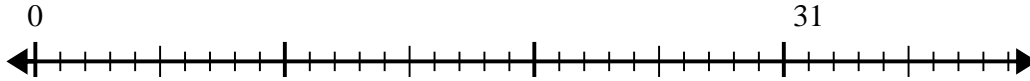
3) $30 \div 4 =$



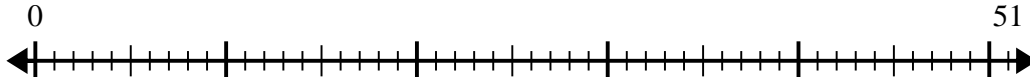
4) $36 \div 5 =$



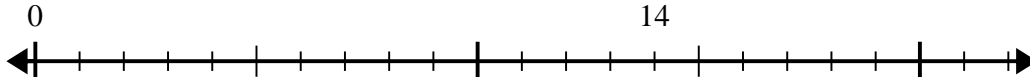
5) $31 \div 5 =$



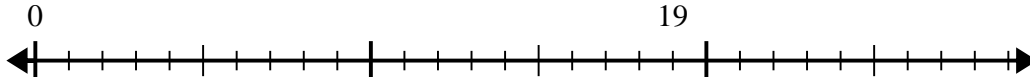
6) $51 \div 8 =$



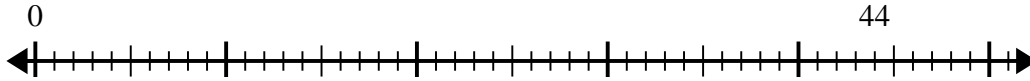
7) $14 \div 4 =$




8) $19 \div 5 =$



9) $44 \div 5 =$



10) $57 \div 8 =$



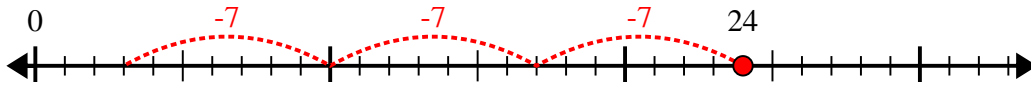
Answers

1. _____
2. _____
3. _____
4. _____
5. _____
6. _____
7. _____
8. _____
9. _____
10. _____

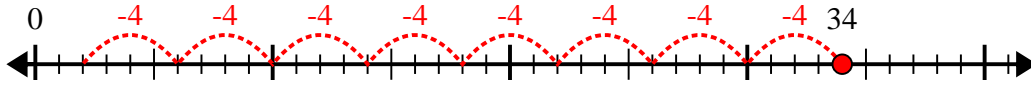


Use the number line to solve the division problem.

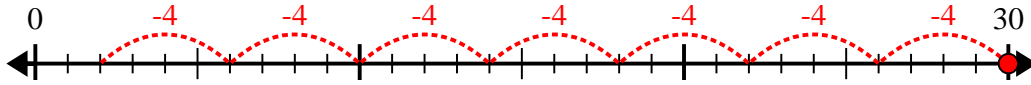
1) $24 \div 7 =$



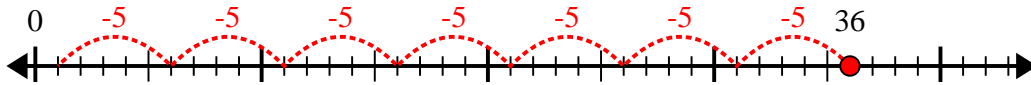
2) $34 \div 4 =$



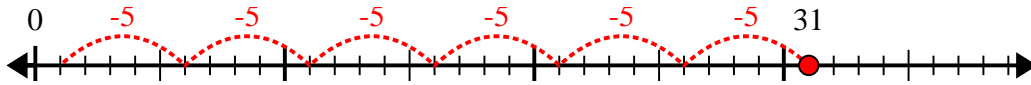
3) $30 \div 4 =$



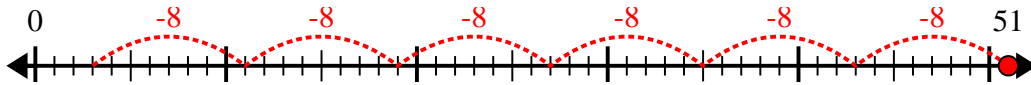
4) $36 \div 5 =$



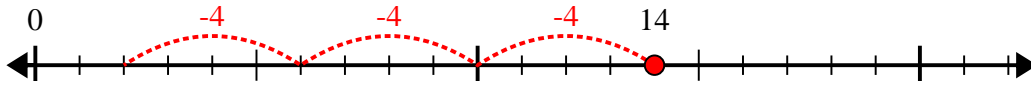
5) $31 \div 5 =$



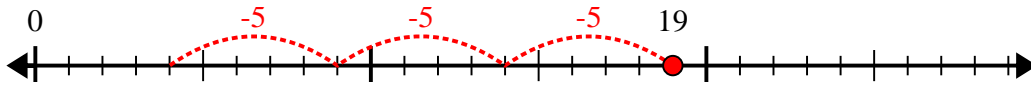
6) $51 \div 8 =$



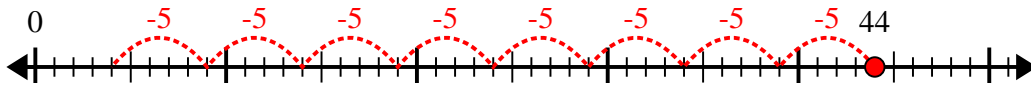
7) $14 \div 4 =$



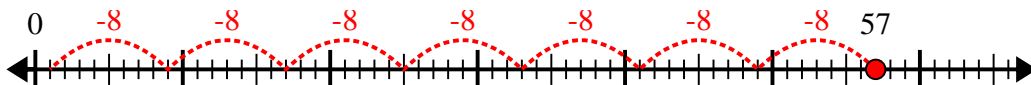
8) $19 \div 5 =$



9) $44 \div 5 =$



10) $57 \div 8 =$



Answers

1. 3r3

2. 8r2

3. 7r2

4. 7r1

5. 6r1

6. 6r3

7. 3r2

8. 3r4

9. 8r4

10. 7r1